



Up-to-date Practice Test with Latest Questions and Answers covering latest syllabus and topics of the exam. Makes you ready to face actual exam.



GRE-Quantitative Practice Questions
GRE-Quantitative Practice Test
GRE-Quantitative Practice Exam
GRE-Quantitative Exam Questions
GRE-Quantitative Study Guide



killexams.com

ETS

GRE-Quantitative

Quantitative Reasoning (QR)

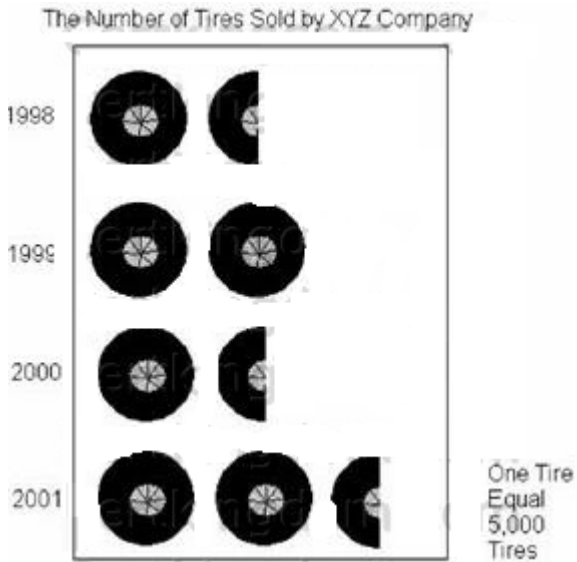
ORDER FULL VERSION

<https://killexams.com/pass4sure/exam-detail/GRE-Quantitative>



QUESTION: No: 402

Which two years were the least number of tires sold?




- A. 1998 and 1999
- B. 1998 and 2000
- C. 1998 and 2001
- D. 1999 and 2000
- E. 2000 and 2001

Answer: B

QUESTION: No: 403

Which of the following is a correct graph of $x > 1$, $x < 4$?

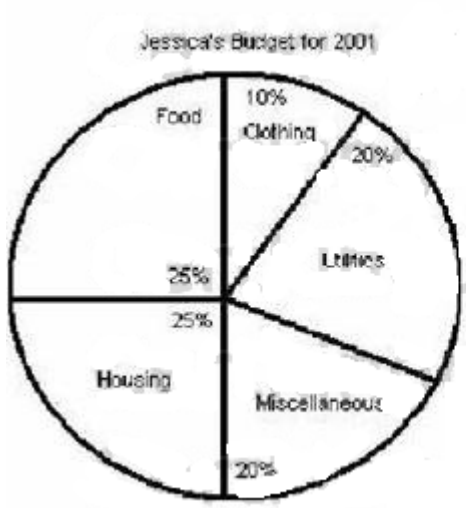


- A. Line A
- B. Line B
- C. Line C
- D. Line D
- E. Line E

Answer: A

QUESTION: No: 404

How much money did Jessica's budget allow for housing in April of 2001?



Jessica's Monthly Earnings from January 2001 to June 2001

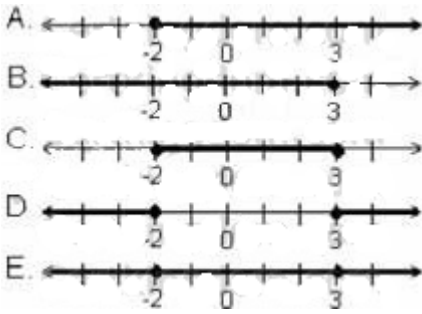
January	\$2578
February	\$2432
March	\$2688
April	\$2480
May	\$2622
June	\$2555

- A. \$617.80
- B. \$620.92
- C. \$622.50
- D. \$626.38
- E. \$633.20

Answer: C

QUESTION: No: 405

Which of the following is the correct graph for $x \geq 3$ and $x \leq -2$

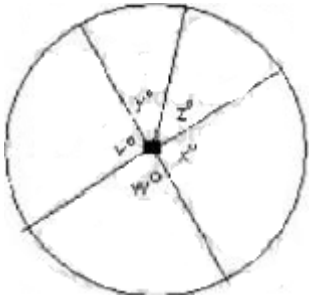


- A. Line A
- B. Line B
- C. Line C
- D. Line D
- E. Line E

Answer: D

QUESTION: No: 406

Column A -The average (arithmetic mean) of $v, w, y, x,$ and z



- A. if the quantity in Column A is greater
- B. if the quantity in Column B is greater
- C. if the two quantities are equal
- D. if it is impossible to determine which quantity is greater

Answer: A

QUESTION: No: 407

The shaded arc in the below figure is 65% of the arc of the entire circle, what is the value of d ?

Column A - d
Column B - 126 degrees

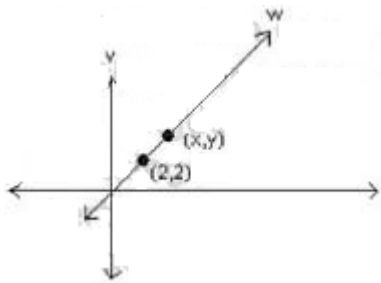


- A. if the quantity in Column A is greater
- B. if the quantity in Column B is greater
- C. if the two quantities are equal
- D. if it is impossible to determine which quantity is greater

Answer: C

QUESTION: No: 408

Column A - $(x-y)$
Column B - 0

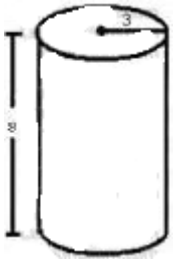


- A. if the quantity in Column A is greater
- B. if the quantity in Column B is greater
- C. if the two quantities are equal
- D. if it is impossible to determine which quantity is greater

Answer: C

QUESTION: No: 409

What is the volume of the following cylinder?

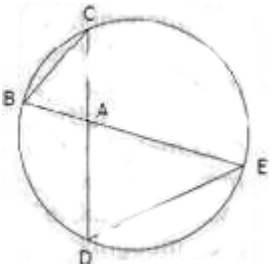


- A. 210.91
- B. 226.20
- C. 75.36
- D. 904.32
- E. 28.26

Answer: B

QUESTION: No: 410

In the above circle $AB = 4$, $BC = 6$, $AC = 5$ and $AD = 6$. What is the length of DE ?



- A. 6
- B. 7.5
- c. 8
- D. 9
- E. 10

Answer: D

QUESTION: No: 411

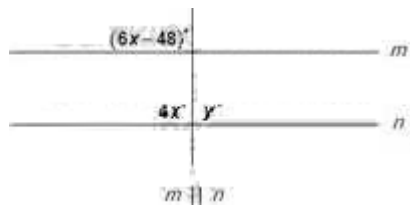
In the above circle, the radius is 6 and $AB = 6$. What is the area of the shaded region?

- A. $2\pi - 3\sqrt{3}$
- B. $4\pi - 4\sqrt{3}$
- C. $4\pi - 9\sqrt{3}$
- D. $6\pi - 6\sqrt{3}$
- E. $6\pi - 9\sqrt{3}$

- A. Option A
- B. Option B
- C. Option C
- D. Option D
- E. Option E

Answer: E

QUESTION: No: 412

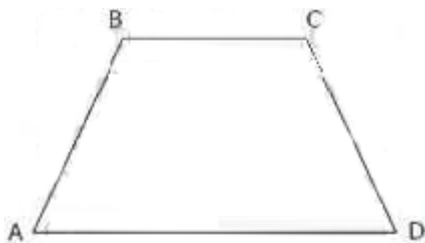


- A. 72
- B. 90
- C. 108
- D. 120
- E. 180

Answer: C

QUESTION: No: 413

What is the area of the trapezoid above if $AB = BC = CD = 6$, and $AD = 12$?



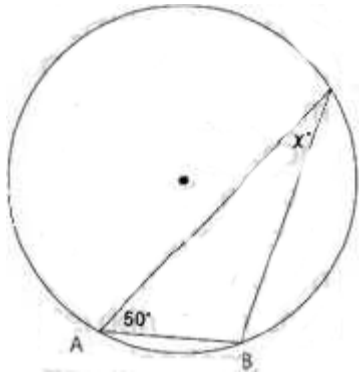
- A. $9\sqrt{2}$
- B. $9\sqrt{3}$
- C. $6\sqrt{6}$
- D. $18\sqrt{2}$
- E. $18\sqrt{3}$

- A. Option A
- B. Option B
- C. Option C
- D. Option D

Answer: B

QUESTION: No: 414

If the radius of the circle above is equal to the chord AB, then what is the value of?



- A. 25
- B. 30
- C. 40
- D. 45
- E. 50

Answer: B

Killexams.com is a leading online platform specializing in high-quality certification exam preparation. Offering a robust suite of tools, including Exam Questions, practice tests, and advanced test engines, Killexams.com empowers candidates to excel in their certification exams. Discover the key features that make Killexams.com the go-to choice for exam success.



Practice Exam Questions Based on Current Exam Objectives

Killexams.com provides practice exam questions aligned with the latest official exam objectives and latest syllabus. Our content is reviewed and updated regularly to reflect recent changes announced by certification vendors. By studying these practice questions, candidates will cover the structure, difficulty level, and topics of the actual exam, helping them prepare more effectively and efficiently.

Comprehensive Practice Exams (PDF Format)

Killexams.com offers multiple-choice questions (MCQs) in easy-to-read PDF format, covering all major domains of the exam. Each PDF contains a structured collection of practice questions and verified answers designed to support focused study. These MCQs help candidates reinforce key concepts, identify knowledge gaps, and improve exam readiness through consistent practice.

Realistic Practice Tests (Online Test Engine & Desktop Test Engine)

To support hands-on preparation, Killexams.com provides practice tests through both an Online Test Engine and a Desktop Test Engine. These tools are designed to simulate a real exam environment, allowing candidates to practice under exam-like conditions, with latest syllabus and topics of the exam. Performance tracking, test history, and result analysis help users evaluate their progress and focus on areas that need improvement.

Risk-Free Purchase Policy

Killexams.com follows a transparent and customer-friendly purchase policy. If users are not satisfied with the study materials, they may request assistance or a refund in accordance with our published terms and conditions. This policy reflects our commitment to customer satisfaction, fairness, and confidence in our preparation resources.

Regularly Updated Content

Our practice question bank is reviewed and updated on an ongoing basis to stay aligned with the latest exam outlines and vendor updates. This ensures candidates are studying up-to-date, relevant material, and preparing with content that reflects current exam expectations, helping them stay confident and well-prepared.