



Up-to-date Practice Test with Latest Questions and Answers covering latest syllabus and topics of the exam. Makes you ready to face actual exam.



WorkKeys Practice Questions  
WorkKeys Practice Test  
WorkKeys Practice Exam  
WorkKeys Exam Questions  
WorkKeys Study Guide



[killexams.com](http://killexams.com)

**ACT**

**WorkKeys**  
WorkKeys Assessment

ORDER FULL VERSION

<https://killexams.com/pass4sure/exam-detail/WorkKeys>



Question: 116

Cheap Call charges \$0.12 per minute for long distance calls. Slim Chance charges \$0.10 per minute plus a flat fee of \$6.95 per month. If your office makes 5 hours and 23 minutes worth of phone calls this month, which company will save you more and by how much?

- A. Slim Chance by \$39.25
- B. Cheap Call by \$38.76
- C. Cheap Call by \$6.39
- D. Slim Chance by \$3.23
- E. Cheap Call by \$0.49

Answer: E

Question: 117

Envelopes cost \$40.95 per 1000 if you buy at least 1000 envelopes or \$77.90 per 2000 if you buy at least 2000 envelopes. Which is the better buy and by how much?

- A. 1000 envelopes by \$0.002
- B. 1000 envelopes by \$0.038
- C. 2000 envelopes by \$0.045
- D. 2000 envelopes by \$0.002
- E. They are equal in cost.

Answer: A

Question: 118

The Bakery has 10 dozen donuts. They sold  $\frac{2}{3}$  of the donuts. How many donuts did they sell?

- A. 126 donuts
- B. 120 donuts
- C. 84 donuts
- D. 48 donuts
- E. 7 donuts

Answer: C

Question: 119

A local swimming pool contractor is going to install a circular swimming pool having a diameter of 27 feet. How much area will the pool take up of the customer's yard?

- A. 84.78 ft<sup>2</sup>
- B. 286.13 ft<sup>2</sup>
- C. 572.27 ft<sup>2</sup>
- D. 1144.53 ft<sup>2</sup>
- E. 2289.06 ft<sup>2</sup>

Answer: C

Question: 120

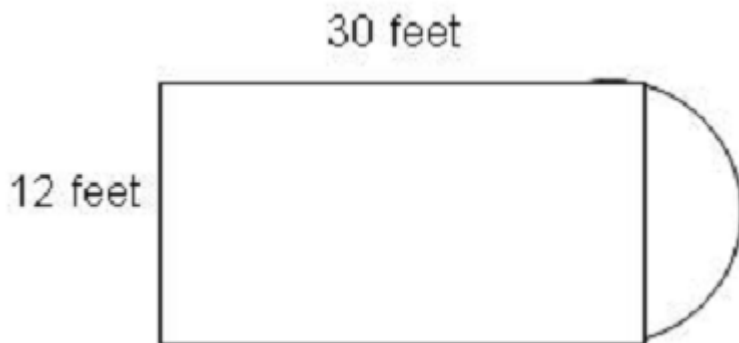
How many acres are contained in a parcel of land 150 feet wide and 250 yards deep?

- A. 0.86 acres
- B. 1.75 acres
- C. 2.58 acres
- D. 5.16 acres
- E. 539.03 acres

Answer: C

Question: 121

You have been asked to resurface the floor shown below. It is a rectangle with a semicircle at one end. What is the area of the floor?



- A. 360 ft<sup>2</sup>
- B. 416.52 ft<sup>2</sup>
- C. 473.04 ft<sup>2</sup>
- D. 586.08 ft<sup>2</sup>
- E. 812.16 ft<sup>2</sup>

Answer: B

Question: 122

A landscaping firm is planning a new garden display. The garden will measure 4 feet by 12 feet. Each flower takes up 9 square inches. If the firm orders less than 500 flowers, the cost is \$0.45 each; if they order over 500, the cost is \$0.36 each. How much will it cost to plant the flower garden?

- A. \$2.40
- B. \$76.80
- C. \$194.40
- D. \$276.48
- E. \$345.60

Answer: D

Question: 123

Kaylen worked the following hours during one week. She is paid \$9.50 per hour for the first 40 hours of work. After 40 hours she is paid 1 times her regularly hourly rate. How much money did Kaylen earn this week?

Day	Hours worked
Monday	7
Tuesday	8
Wednesday	6.5
Thursday	12
Friday	8.75

- A. \$401.38
- B. \$412.06
- C. \$420.38
- D. \$522.50
- E. \$562.32

Answer: B

Question: 124

Your parents have given you permission to repaint your bedroom. The dimensions of the room are 13 feet by 14 feet, and it is 8 feet high. The room has two windows with dimensions 3 feet by 4 feet, and the doorway measures 7 feet by 3 feet. According to the directions on the can, one gallon of paint will cover 300 square feet. You plan on putting on two coats of paint. Determine how many gallons of paint you will need to cover the walls and ceiling.

Answer: A

Question: 125

A savings account earns 4% annual interest compounded quarterly. How much interest would \$500 earn if it was invested for one year?

- A. \$20.00
- B. \$20.30
- C. \$54.20
- D. \$84.93
- E. \$200.00

Answer: B

Question: 126

Charter Pools is installing a new circular pool in a customers backyard. The customer has a well and is not able to fill the pool. Charter Pools will haul in water, but they need to determine how many gallons of water they will need. The truck can carry 6500 gallons of water. The pool is 27 feet in diameter and 54 inches deep. How many gallons are needed to fill the pool?

- A. 535 gallons
- B. 2576 gallons
- C. 19,264 gallons
- D. 30,902 gallons
- E. 924,661 gallons

Answer: C

Question: 127

Barb worked the following hours during one week. She is paid \$12.50 per hour for the first 40 hours of work. After 40 hours she is paid 1 times her regularly hourly rate unless it is a Sunday or a holiday then she earns double time for those particular hours. How much money did Barb earn this week?

Day	Hours worked
Sunday	5
Monday	7
Tuesday	0
Wednesday	6.5
Thursday—Thanksgiving	9
Friday	8.75
Saturday	6

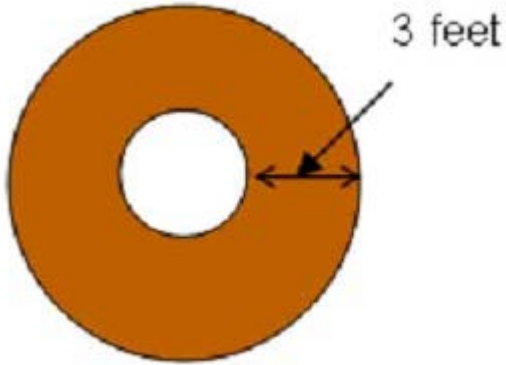
- A. \$528.13
- B. \$556.25

- C. \$640.63
- D. \$665.63
- E. \$703.13

Answer: E

Question: 128

A landscape company plans to install mulch around 3 trees in a customers yard. The trees have a diameter of 3 feet, and mulch is to be placed 3 feet around the tree and 4 inches deep. How many cubic yards of mulch are needed?




- A.  $\frac{3}{4}$  cubic yard
- B. 1 cubic yard
- C.  $1\frac{1}{2}$  cubic yard
- D.  $2\frac{1}{4}$  cubic yard
- E. 5 cubic yards

Answer: D

Question: 129

Find the area of the shaded sections of the wooden frame shown below if the picture itself is 16 inches by 8 inches, and the overall dimensions are 20 inches by 12 inches.



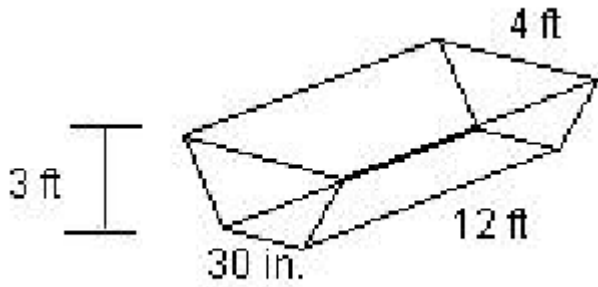
- A. 18 in<sup>2</sup>

- B. 20 in<sup>2</sup>
- C. 36 in<sup>2</sup>
- D. 48 in<sup>2</sup>
- E. 72 in<sup>2</sup>

Answer: E

Question: 130

The water tank on a rancher's truck holds 250 gallons. Can this water trough shown be completely filled in one trip? If not, how many trips must be made?



- A. It can be filled in one trip.
- B. 2 trips
- C. 3 trips
- D. 4 trips
- E. 5 trips

Answer: D

Killexams.com is a leading online platform specializing in high-quality certification exam preparation. Offering a robust suite of tools, including Exam Questions, practice tests, and advanced test engines, Killexams.com empowers candidates to excel in their certification exams. Discover the key features that make Killexams.com the go-to choice for exam success.



## Practice Exam Questions Based on Current Exam Objectives

Killexams.com provides practice exam questions aligned with the latest official exam objectives and latest syllabus. Our content is reviewed and updated regularly to reflect recent changes announced by certification vendors. By studying these practice questions, candidates will cover the structure, difficulty level, and topics of the actual exam, helping them prepare more effectively and efficiently.

## Comprehensive Practice Exams (PDF Format)

Killexams.com offers multiple-choice questions (MCQs) in easy-to-read PDF format, covering all major domains of the exam. Each PDF contains a structured collection of practice questions and verified answers designed to support focused study. These MCQs help candidates reinforce key concepts, identify knowledge gaps, and improve exam readiness through consistent practice.

## Realistic Practice Tests (Online Test Engine & Desktop Test Engine)

To support hands-on preparation, Killexams.com provides practice tests through both an Online Test Engine and a Desktop Test Engine. These tools are designed to simulate a real exam environment, allowing candidates to practice under exam-like conditions, with latest syllabus and topics of the exam. Performance tracking, test history, and result analysis help users evaluate their progress and focus on areas that need improvement.

## Risk-Free Purchase Policy

Killexams.com follows a transparent and customer-friendly purchase policy. If users are not satisfied with the study materials, they may request assistance or a refund in accordance with our published terms and conditions. This policy reflects our commitment to customer satisfaction, fairness, and confidence in our preparation resources.

## Regularly Updated Content

Our practice question bank is reviewed and updated on an ongoing basis to stay aligned with the latest exam outlines and vendor updates. This ensures candidates are studying up-to-date, relevant material, and preparing with content that reflects current exam expectations, helping them stay confident and well-prepared.